



Primrose Schools

Affiliated to the CISCE Board for ICSE & ISC
Affiliated to the Cambridge University for IGCSE, AS & A Level
An ISO 9001:2015 Certified Institution

NATIONAL PRIMTALENT OLYMPIAD EXAMINATIONS SCIENCE

CLASS
2

Name :

Section :


Roll no :

Guidelines for the Candidates





1	Please check your Name, Class and Section on the OMR sheet provided to you.
2	In case, OMR sheet with your name is missing, please fill in information about yourself in the blank sheet provided before start of exam.
3	All questions are compulsory. There is no negative marking. Use of calculator is not permitted.
4	There is only ONE correct answer. Choose only ONE option for an answer.
5	To mark your choice of answers by darkening the circles in OMR sheet, use <u>HB Pencil or Blue/Black ball point pen</u> only.
6	Rough work should be done in the blank space provided in the booklet.
7	Return the OMR sheet to the invigilator at the end of the exam
8	Please fill in your personal details in space on the top of this page before attempting the paper

SECTION A - LOGICAL REASONING

1. How many 4 burger groups can be made from the given burgers?



- a) 3 b) 4 c) 5 d) 6





2. A jar contains 8 , 4 , 12 , and 3 . Which of the following is least likely to come out of it.

- a)  b)  c)  d) 

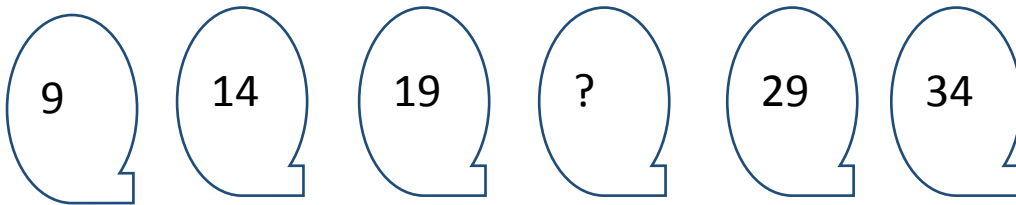
3) If 'Apple' is called 'Mango' 'Mango' is called 'Orange', 'Orange' is called 'Grapes' and "Grapes' is called 'Strawberry', then the king of fruits is called _____

- a) Mango b) Apple c) Orange d) Grapes

4) Select the odd one out:

- a)  b)  c)  d) 

5) Find the missing numbers:



a) 22

b) 27

c) 25

d) 24

6. Which of the following patterns will have 80 as the next number?

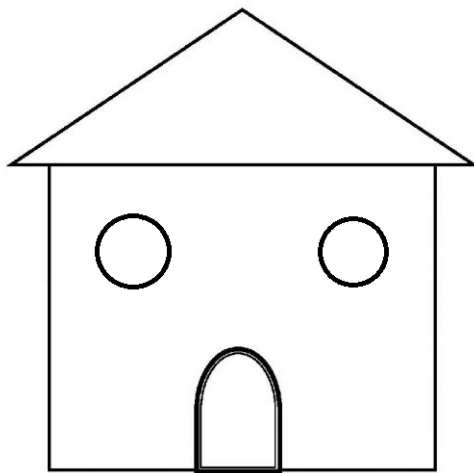
a) 20, 40, 60

b) 40, 50, 60

c) 60, 40, 20

d) 25, 50, 75

7. Which of the following shapes is missing in the given figure?



a) square

b) rectangle

c) triangle

d) circle

8. I have six legs. I lay eggs but I cannot fly. Who am I?

a) Spider

b) Mosquito

c) Housefly

d) Head lice

9. Lalit starts his football practice on 5th January 2015 and finishes his practice on 20th January 2015. How many days did he practice?
(Assume that all Sunday and second Saturday is a holiday)

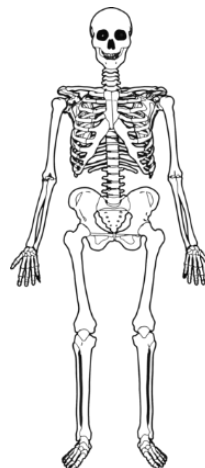
JANUARY 2015

Sunday	Monday	Tuesday	Wednesday	Thursday	Friday	Saturday
				1	2	3
4	5	6	7	8	9	10
11	12	13	14	15	16	17
18	19	20	21	22	23	24
25	26	27	28	29	30	31

- a) 12
- b) 11
- c) 13
- d) 14

10. Where is the longest bone in our body located?

- a) backbone
- b) thigh
- c) forearm
- d) chest



SECTION B-EVERYDAY SCIENCE


11. Which is the largest living animal?

- a) elephant
- b) dinosaur
- c) blue whale
- d) giraffe

12. Identify the incorrect match:

- a) Parrot – herbivores
- b) Elephant – herbivores
- c) Bear - Omnivores
- d) Lion – Carnivores

13. The picture shows home for dogs.



Which options when unscrambled gives its name?

- a) B E L S A T
- b) D O N P
- c) E K N E N L
- d) M R A F

14. The fruit without seeds is _____.

- a) banana
- b) apple
- c) orange
- d) none of these

15. Choose the names of plants whose leaves are taken as food.

- a) Onion
- b) eggs
- c) ginger
- d) cabbage

16. Bees and butterflies collect from flowers.

- a) oil
- b) nectar
- c) colour
- d) all of these

17. The animal is found in _____.



- a) India
- b) America
- c) Australia
- d) None of these


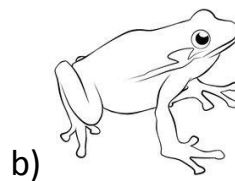

18. Kingfisher comes under _____ category.

- a) fish
- b) bird
- c) insect
- d) starfish

19. A panda is a/an animal.

- a) extinct
- b) endangered
- c) aquatic
- d) domestic

20. Which of these animals does NOT lay eggs?



21. Humans and animals need shelters to_____.

- a) breathe
- b) help them grow
- c) protect themselves from danger
- d) stay alive

22. Drinking water is boiled because boiling kills_____.

- a) Microbes
- b) fish
- c) soil
- d) none of these

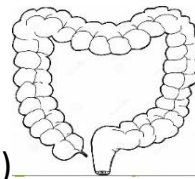
22. The skull protects our _____.

- a) Lungs
- b) brain
- c) stomach
- d) heart

23. Which of the following is an organ of the respiratory system?



a)



b)



c)



d)

24. Which of these parts of the body can bend?

- a) Knee
- b) elbow
- c) neck
- d) all of these

25. Our skin gives us the sense of _____.

- a) Taste
- b) touch
- b) c) smell
- d) all of these

26. Our body is made up of _____ bones.

- a) 200
- b) 302
- c) 401
- d) 206



27. Which of the following things is safe for sharpening a pencil?

- a) a blade
- b) a knife
- c) a sharpener
- d) a pair of scissors

28. What is meant by Zebra crossing?

- a) It is a crossing where zebras cross
- b) it is a path where pedestrians can walk
- c) It is a set of lines painted on the road for safe crossing
- d) It is a place where vehicles can park




29. Electrical appliances and switches should be tested only with _____.



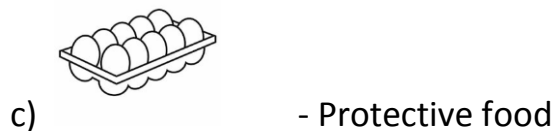


30. What kind of clothes must be worn while lighting crackers?

- a) Nylon
- b) Polyester
- c) Terylene
- d) Cotton

31. Which is the correct posture for reading?



32. Which of the following pair is NOT correct?



SECTION C - HIGHER ORDER THINKING

33. should be the heaviest and should be the lightest meal of the day.

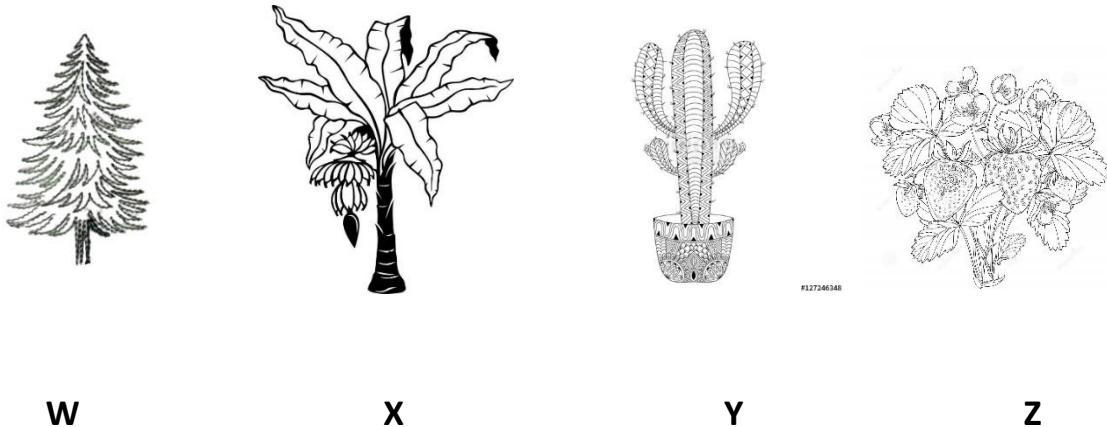
- a) breakfast, lunch
- b) Lunch, dinner
- c) evening snacks, breakfast
- d) breakfast, dinner

34. Which of these has been put under the wrong heading?

Solid	Liquid	Gas
Candle	Orange juice	Water vapour
Eraser	Water	Ice - cube

- a) water
- b) candle
- c) water vapour
- d) Ice cube

35. Which of these plants are adapted to live in cold and hot places respectively?

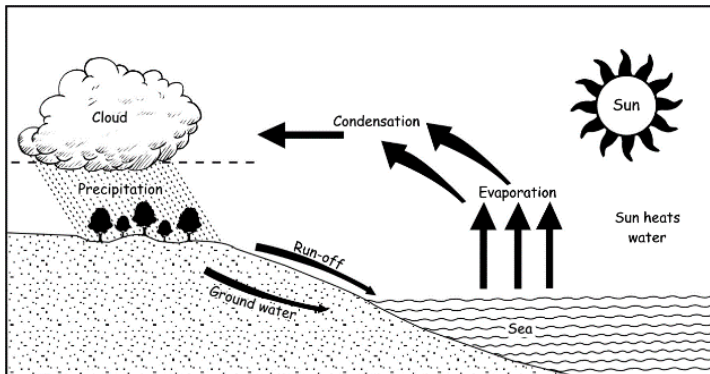


- a) W and Y
- b) X and Z
- c) X and Y
- d) W and Z

36. When the earth is seen from outer space, it looks mainly blue. This is because most of the parts of the Earth is covered with_____.

- a) ice
- b) mountains
- c) water
- d) deserts

37. Which of the given options match the given picture?



- a) water pollution.
- b) path of germs in the air
- c) formation of clouds
- d) water cycle

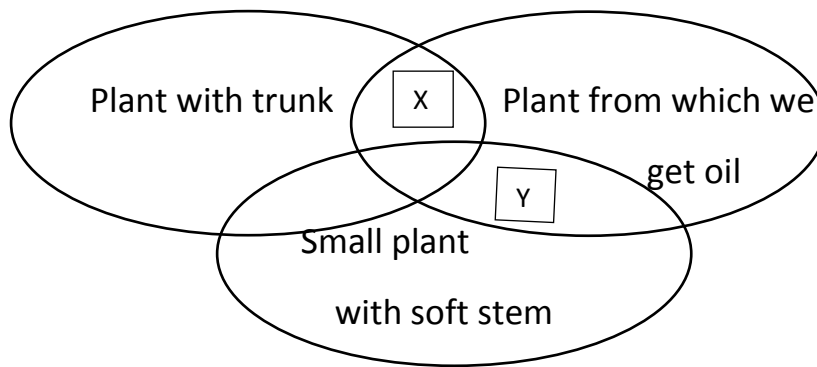
38. Clouds are made up of_____.

- a) tiny water droplets
- b) steam
- c) water vapour
- d) air

39. Rhinoceros are hunted for their_____.

- a) horns
- b) bones
- c) tusks
- d) skin

40. Study the given figure. Which of the following best represents X and Y?



- a) X – Mustard, Y – Sunflower
- b) X – Coconut, Y – Sunflower
- c) X – Sunflower, Y – Groundnut
- d) X – Groundnut, Y – Mustard